

# 6 Times Table Activities

Count in 6s and colour in the grid:

1	2	3	4	5	6	7	8	9	10	11	12
13	14	15	16	17	18	19	20	21	22	23	24
25	26	27	28	29	30	31	32	33	34	35	36
37	38	39	40	41	42	43	44	45	46	47	48
49	50	51	52	53	54	55	56	57	58	59	60
61	62	63	64	65	66	67	68	69	70	71	72
73	74	75	76	77	78	79	80	81	82	83	84
85	86	87	88	89	90	91	92	93	94	95	96
97	98	99	100	101	102	103	104	105	106	107	108
109	110	111	112	113	114	115	116	117	118	119	120
121	122	123	124	125	126	127	128	129	130	131	132
133	134	135	136	137	138	139	140	141	142	143	144

Work out these answers:

a)  $2 \times 6 =$  \_\_\_\_\_

d)  $8 \times 6 =$  \_\_\_\_\_

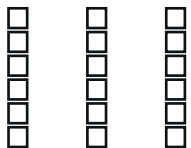
b)  $12 \times 6 =$  \_\_\_\_\_


e)  $7 \times 6 =$  \_\_\_\_\_


c)  $5 \times 6 =$  \_\_\_\_\_

f)  $6 \times 6 =$  \_\_\_\_\_

How many blocks are there?

a)  \_\_\_\_\_ x \_\_\_\_\_ = \_\_\_\_\_

b)  \_\_\_\_\_ x \_\_\_\_\_ = \_\_\_\_\_

c)  \_\_\_\_\_ x \_\_\_\_\_ = \_\_\_\_\_